



<b>Twinkl Bus</b> Seaside £3 and 50p	<b>Twinkl Bus</b> Swimming Pool £3 and 20p	<b>Twinkl Bus</b> Science Museum £2 and 80p
--	--	---


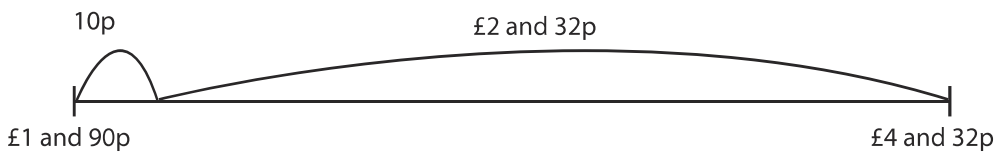


Finlay had £7 and 15p. He bought a bus ticket and had £4 and 35p left.

Which ticket did he buy?

Finlay bought a ticket to \_\_\_\_\_.

2) Madeline, Grace and Jack are trying to find the difference between £4 and 32p and £1 and 90p.

Who has got the correct answer? Who is incorrect?

<p>Madeline</p>  <p>I used a number line.</p>	
<p>Grace</p> 	$£4 - £1 = £3$ $90p - 32p = 58p$ <p>The answer is £3 and 58p</p>
<p>Jack</p> 	$£4 \text{ and } 32p - £2 = £2 \text{ and } 32p$ $£2 \text{ and } 32p + 10p = £2 \text{ and } 42p$

---

---

---

---

---

---

---

---

---

---